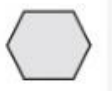
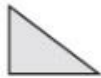








Date: 28/09/2023
Grade: III

TERM 1 (2022-23)
MATHEMATICS

Max marks: 40
Time: 2 hours

Q.No.	Questions	Mark
	MULTIPLE CHOICE QUESTIONS (Choose the correct answer from the given options)	
1	How many corners does this shape have?  a. 8 b. 6 c. 5 d. 7	1
2	Which of the following is a 3D shape ? a.  b.  c.  d. 	1
3	How many pieces are there in a tangram? a. 7 b. 8 c. 5 d. 6	1
4	Arrangement of shapes without leaving a gap is called a. Map b. Tiling c. Diagonal d. Reflection	1
5	What is the face value of 6 in 769 ? a. 6 b. 10 c. 60 d. 600	1
6	What is the place value of 5 in 567 ? a. 5 b. 500 c. 50 d. 100	1

7	Choose the number: Six hundred eight a. 680 b. 688 c. 608 d. 618	1
8	Choose the number name: 470 a. Four hundred seventeen b. Four hundred seventy c. Seven hundred forty d. Seven hundred fourteen	1
9	435 + 321 is equal to a. 756 b. 755 c. 765 d. 865	1
10	567-320 is equal to a. 274 b. 247 c. 374 d. 347.	1
11	The sum of 293 and 345 is a. 538 b. 583 c. 638 d. 683	1
12	Find the difference of 578 and 187 is a. 191 b. 291 c. 391 d. 491	1
FILL IN THE BLANK		
13	A circle has corners.	1
14	A line joining two opposite corners of the shape is called	1
15 is the largest three digit number.	1
16	The predecessor of 345 is	1
17	400 + 100 =	1
TRUE OR FALSE		
18	A triangle has only two corners.	1
19	Arranging the numbers from smallest to the greatest is called ascending ordering.	1
20	183 is nearer to 180 than to 190.	1

VERY SHORT ANSWER TYPE QUESTIONS		
21	Write the number of edges and corners of the following figure: <div style="text-align: center;">  </div>	2
22	Draw a rectangle and its diagonals.	2
23	Arrange the following numbers in ascending order: 678 , 386, 976 , 787	2
24	Form the greatest and the smallest number using the digits 4, 2 and 6	2
25	Round the number 678 to the nearest hundred.	2
SHORT ANSWER TYPE QUESTIONS		
26	Complete the pattern: 320, 330,,,,,	3
27	Find out the estimated difference to the nearest hundred: 485-211	3
LONG ANSWER TYPE QUESTION		
28	A farm growing medicinal herbs has 471 tulsi plants and 355 ginger plants. How many medicinal herbs does the farm have in all?	4